

राज्य स्तरीय प्रारंभिक शिक्षा परीक्षा

सत्र 2018-19

कक्षा - 1

विषय - गणित

समय - 02.00 घंटे

पूर्णांक -30


अनुक्रमांक (अंकों में) (शब्दों में)

परीक्षार्थी का नाम शाला का नाम


हस्ताक्षर निरीक्षक हस्ताक्षर जाँचकर्ता

प्राप्तांक अंकों में प्राप्तांक शब्दों में


Q.01. Which box has three flowers ?




(a)



(b)



(c)



(d)

Q.02. Write the number of balls in the box ?



=



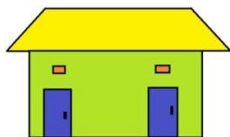
(a) 5

(b) 4

(c) 2

(d) 6

Q.03.



The house has..... doors.

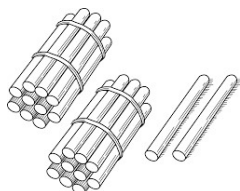
(a) one

(b) two

(c) three

(d) four

Q.04.



means

(a) twenty two

(b) twenty

(c) twelve

(d) ten

Q.05. Forty nine will be written as

(a) $4 + 9$


(b) 49

(c) 94


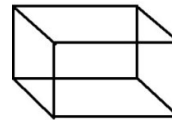
(d) 409

Q.06. Match the shape of objects in column 1 with the geometrical shapes in column 2

Column 1



Column 2



Q.07. Subtract the numbers :

(1) $4 - 2$

(2) $7 - 7$

Q.08. Write the missing number:

(a)

(b)

Q.09. Backward counting from 80 to 70 will be :

80, 79, , , 76, , , 73, 72 , 71, 70

Q.10. Encircle the smallest number:

(i) 7, 8, 18, 2, 11

(ii) 19, 25, 32

Q.11 Encircle the largest number:

(i) 15, 23, 12, 31

(ii) 1, 15, 7, 27

Q.12. **Tens** **Ones** means

2 3

(a) two tens & three ones

(b) two ones & three tens

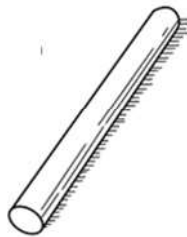
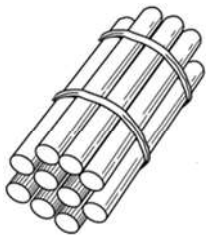
(c) three ones & three tens

(d) one tens & three ones

Q.13.

Tens

ones




Shows

(a) 20 (b) 10 (c) 1 (d) 11

Q.14. Tick (✓) the heavier



Q. 15. Which is the smallest melon :



A

B

C

D

(a) B

(b) A

(c) C

(d) D